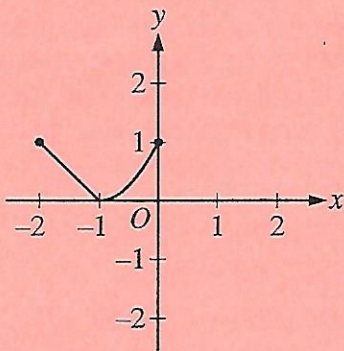
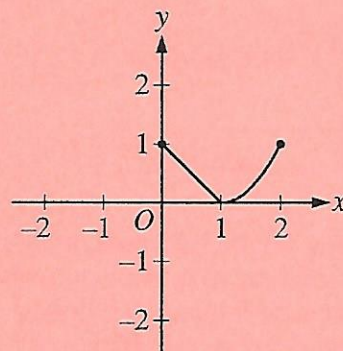


33. The graph of $y = f(x)$ is shown above. Which of the following could be the graph of $y = f(x+1)$?

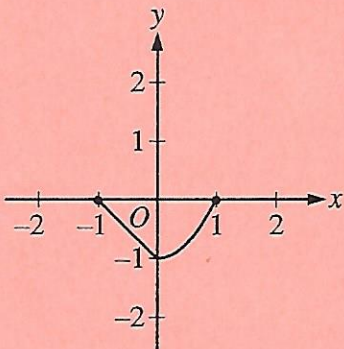
(A)



(B)



(C)



(D)

